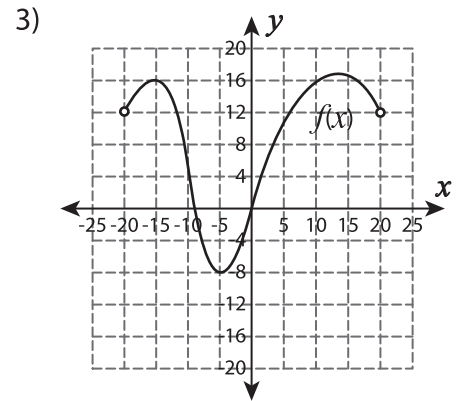
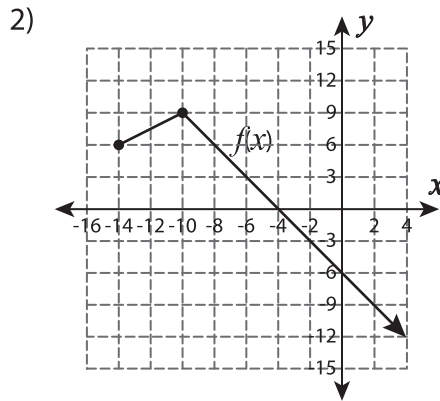
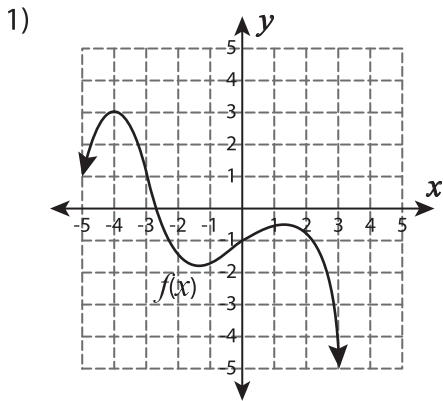


Evaluating Functions - Graphing

A) Evaluate.



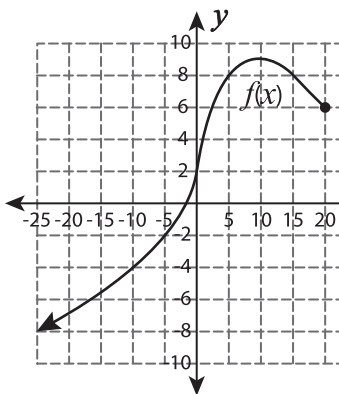
i) $f(-4) =$ _____

ii) $f(0) =$ _____

$f(-5) =$ _____

$f(10) =$ _____

B) Evaluate.



Gain complete access to the largest collection of worksheets in all subjects!

Members, please log in to download this worksheet.

Not a member? Please sign up to gain complete access.

www.mathworksheets4kids.com

$\frac{6f(-25)}{f(-5)}$

$-7f(-10) - f(5)$

C) For what values of x ,

