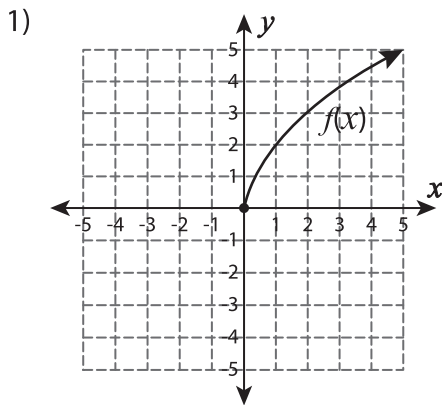
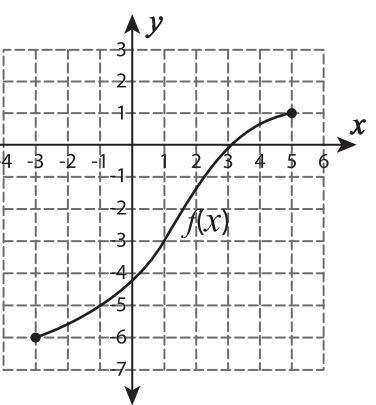
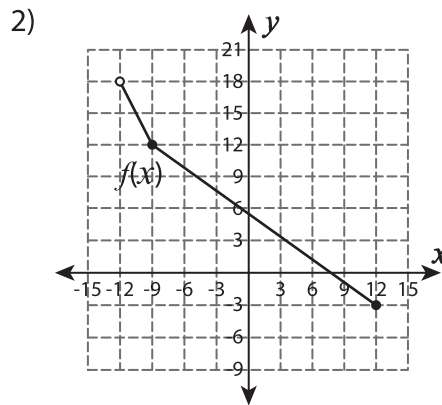


Evaluating Inverse Functions - Graphing

A) Evaluate.

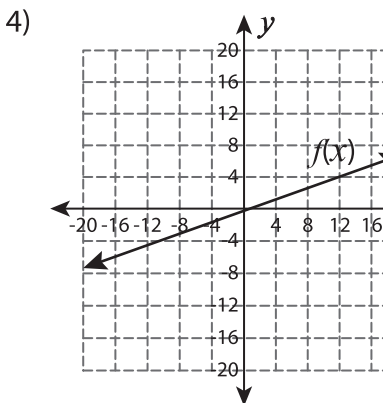


$f^{-1}(2) =$ _____



$f^{-1}(-5) =$ _____

B) Evaluate.



i) $f^{-1}(4) =$ _____

ii) $f^{-1}(0) =$ _____

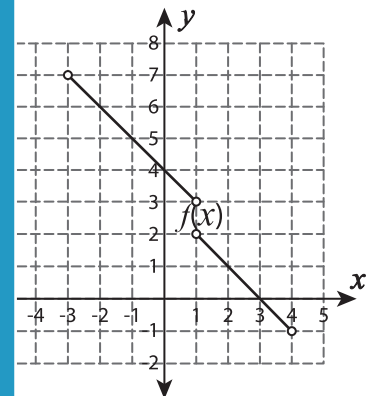
PREVIEW

Gain complete access to the largest collection of worksheets in all subjects!

Members, please log in to download this worksheet.

Not a member? Please sign up to gain complete access.

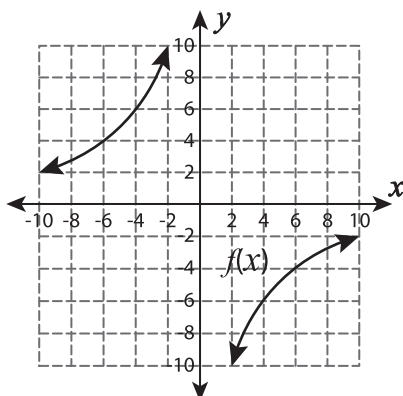
www.mathworksheets4kids.com



i) $f^{-1}(5) =$ _____

ii) $f^{-1}(1) =$ _____

C) Evaluate.



i) $3f^{-1}(-10) - 4f^{-1}(4)$

ii) $\frac{2f^{-1}(2)}{f^{-1}(-6)}$

iii) $f^{-1}(-2) + 5f(6)$

iv) $-3f^{-1}(10) \times f(-4)$
