

Name : _____

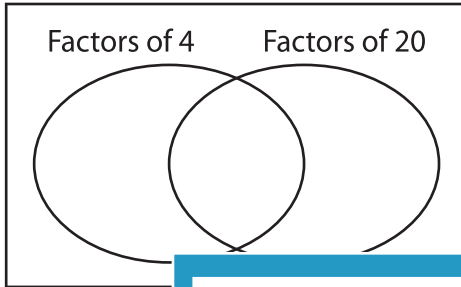
GCF - Venn Diagram

ES3

Find the greatest common factor for each pair of numbers using Venn diagram.

1) 4, 20

a) Complete the venn diagram.

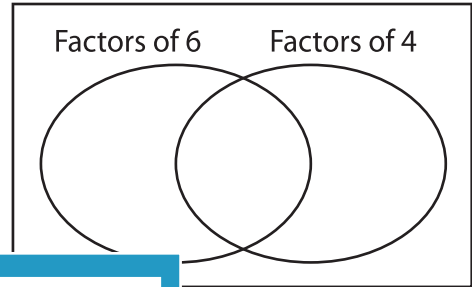


b) Common factors are _____

c) $GCF(4, 20) =$ _____

2) 6, 4

a) Complete the venn diagram.



b) Common factors are _____

c) _____

3) 18, 6

a) Complete the



b) Common factors are _____

c) $GCF(18, 6) =$ _____

Gain complete access to the largest collection of worksheets in all subjects!

Members, please log in to download this worksheet.

Not a member? Please sign up to gain complete access.

www.mathworksheets4kids.com

venn diagram.

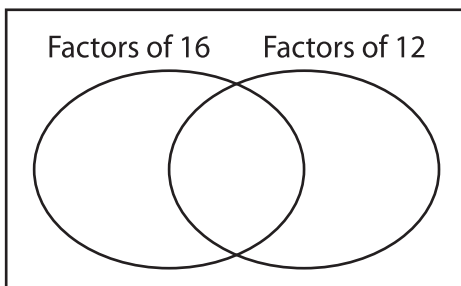
Factors of 20 Factors of 12

b) Common factors are _____

c) _____

5) 16, 12

a) Complete the



b) Common factors are _____

c) $GCF(16, 12) =$ _____

venn diagram.

Factors of 9 Factors of 18

b) Common factors are _____

c) $GCF(9, 18) =$ _____