


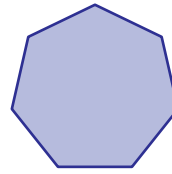
Name : _____

Comparing Sides and Corners

1)



Number of corners: _____



Number of corners: _____

Which shape has more corners? a) octagon b) heptagon

2)



Number of



s: _____

Which shape has fe

triangle

3)



Number of co



s: _____

Which shape has few

pentagon

4)



Number of




s: _____

Which shape has more sides?


a) heptagon

b) trapeziod

5)



Number of corners: _____



Number of corners: _____

Which shape has fewer corners? a) hexagon b) kite

PREVIEW

Gain complete access to the largest collection of worksheets in all subjects!

Members, please log in to download this worksheet.

Not a member? Please sign up to gain complete access.

www.mathworksheets4kids.com