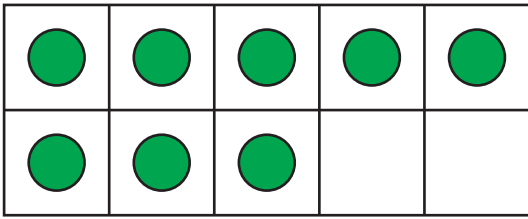


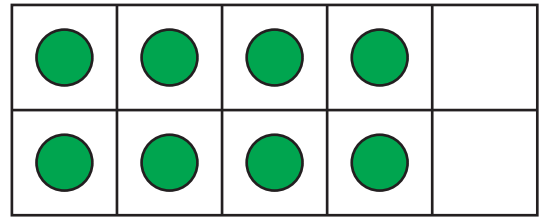
# Comparing Ten Frames

Compare the counters on each pair of ten frames using  $>$ ,  $<$ , or  $=$ .

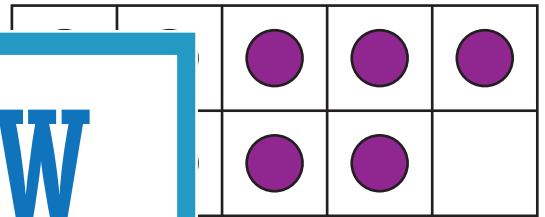
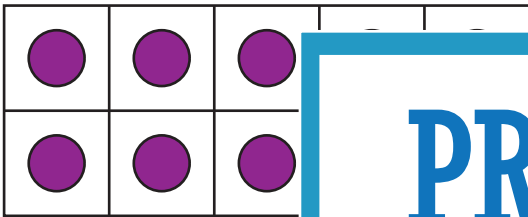
1)



\_\_\_\_\_



2)



## PREVIEW

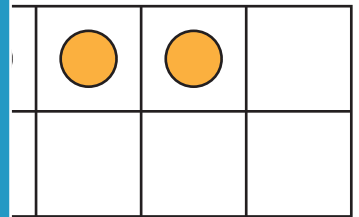
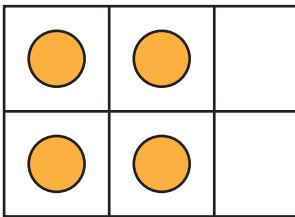
Gain complete access to the largest  
collection of worksheets in all subjects!

Members, please  
log in to  
download this  
worksheet.

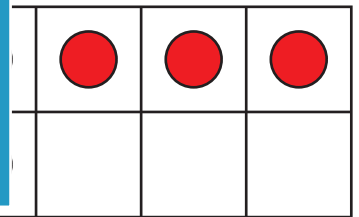
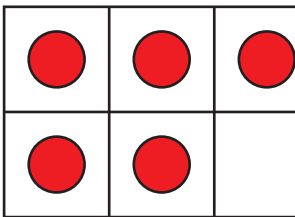
Not a member?  
Please sign up to  
gain complete  
access.

[www.mathworksheets4kids.com](http://www.mathworksheets4kids.com)

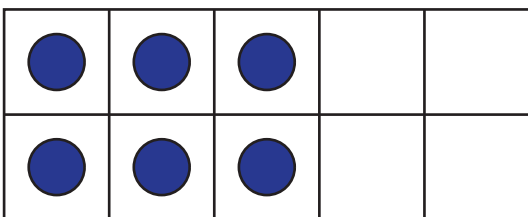
3)



4)



5)



\_\_\_\_\_

