

Name : \_\_\_\_\_

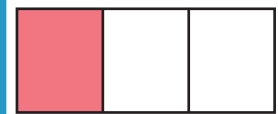
## One-half, One-third, and One-fourth

1) a) Check the fraction strip representing the fraction  $\frac{1}{2}$ .




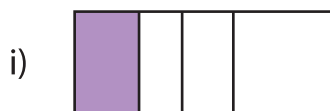
b) How many halves make a whole?

2) a) Check the fraction strip representing the fraction  $\frac{1}{3}$ .



b) How many thirds make a whole?

3) a) Check the fraction strip representing the fraction  $\frac{1}{4}$ .



b) How many fourths make a whole?

# PREVIEW

Gain complete access to the largest collection of worksheets in all subjects!

Members, please log in to download this worksheet.

Not a member? Please sign up to gain complete access.

[www.mathworksheets4kids.com](http://www.mathworksheets4kids.com)