

Name : \_\_\_\_\_

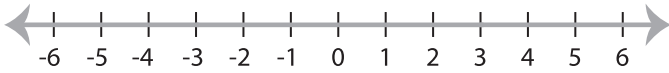
Score : \_\_\_\_\_

**Solving & Graphing Inequalities**

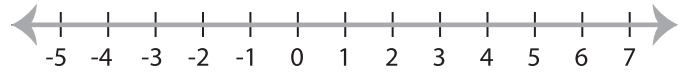
Basic: S1

Solve each problem and graph the solutions.

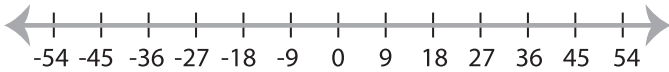
1)  $|x| < 3$



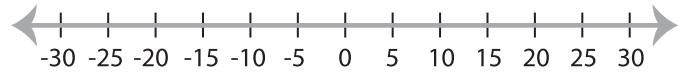
2)  $|x| \geq 2$



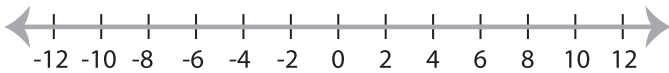
3)  $-|x| \leq 27$



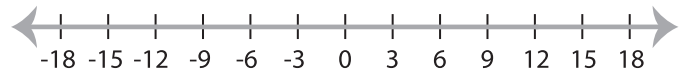
4)  $|x| > 15$



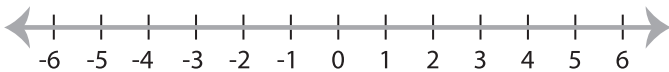
5)  $|x| \geq 6$



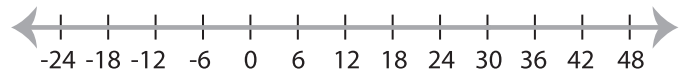
6)  $|x| < 12$



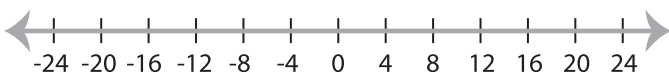
7)  $|-x| \leq 1$



8)  $|x| > -18$



9)  $|x| > 16$



10)  $|x| \leq 4$

