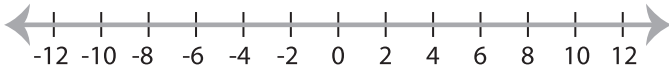


## Solving & Graphing Inequalities

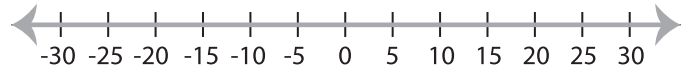
Basic: S2

Solve each problem and graph the solutions.

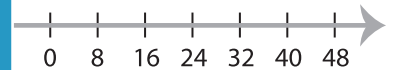
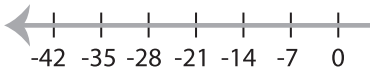
1)  $|x| \geq 8$



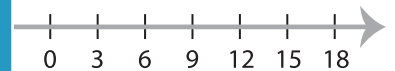
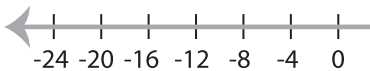
2)  $|-x| \leq 10$



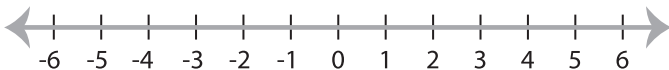
3)  $|x| > 7$



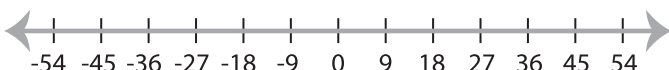
5)  $|x| \leq -16$



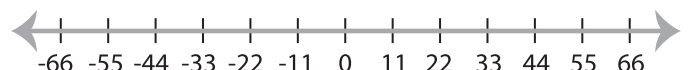
7)  $|x| < 5$



9)  $|x| \leq 18$



10)  $-|x| \geq 22$



# PREVIEW

Gain complete access to the largest  
collection of worksheets in all subjects!

Members, please  
log in to  
download this  
worksheet.

Not a member?  
Please sign up to  
gain complete  
access.

[www.mathworksheets4kids.com](http://www.mathworksheets4kids.com)