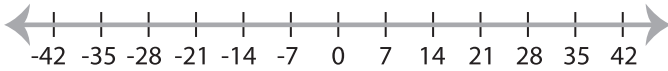


Solving & Graphing Inequalities

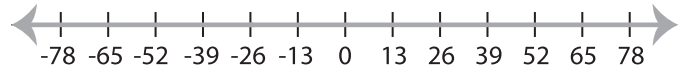
Basic: S3

Solve each problem and graph the solutions.

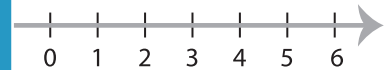
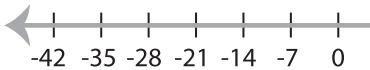
1) $|x| \leq 21$



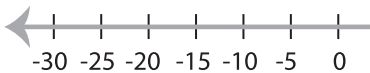
2) $|x| < -13$



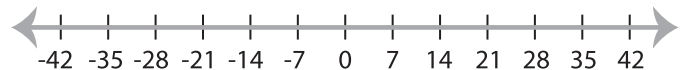
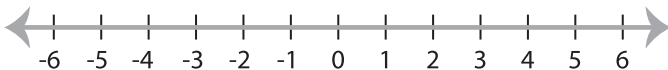
3) $|x| \geq 28$



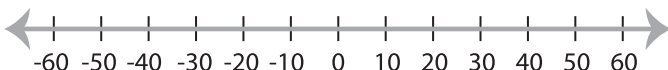
5) $|x| < 25$



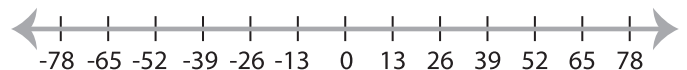
7) $-|x| > 3$



9) $|x| \geq 30$



10) $|x| < 26$



PREVIEW

Gain complete access to the largest
collection of worksheets in all subjects!

Members, please
log in to
download this
worksheet.

Not a member?
Please sign up to
gain complete
access.

www.mathworksheets4kids.com