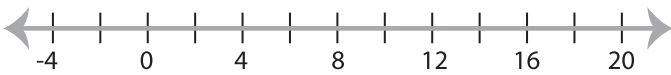


## Solving & Graphing Inequalities

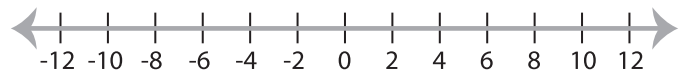
One-step: S1

Solve each problem and graph the solutions.

1)  $|x - 8| \geq 10$



2)  $4|x| \leq 16$



3)  $|x + 3| < 9$



**PREVIEW**

Gain complete access to the largest  
collection of worksheets in all subjects!

Members, please  
log in to  
download this  
worksheet.

Not a member?  
Please sign up to  
gain complete  
access.

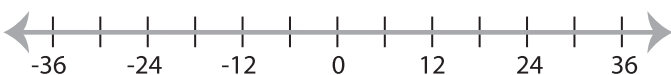
[www.mathworksheets4kids.com](http://www.mathworksheets4kids.com)



5)  $|-5x| \geq 25$



7)  $\frac{|x|}{6} < 3$



8)  $|x| + 12 > 19$

