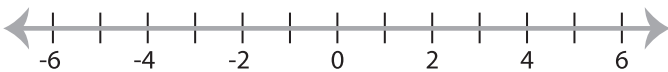


Solving & Graphing Inequalities

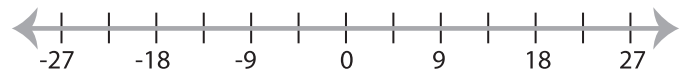
One-step: S2

Solve each problem and graph the solutions.

1) $|17x| > 51$



2) $\frac{|x|}{9} \geq -3$



3) $|x| - 15 \leq 5$



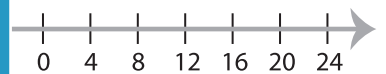
PREVIEW

Gain complete access to the largest
collection of worksheets in all subjects!

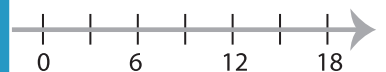
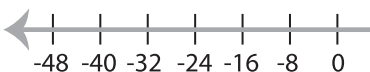
Members, please
log in to
download this
worksheet.

Not a member?
Please sign up to
gain complete
access.

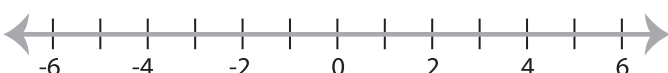
www.mathworksheets4kids.com



5) $\frac{|x|}{8} > 4$



7) $|x + 2| \geq 3$



8) $|x - 4| \leq 5$

