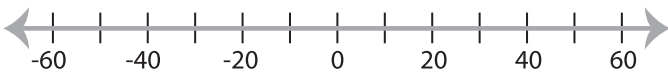


Solving & Graphing Inequalities

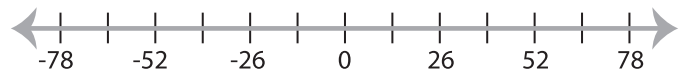
One-step: S3

Solve each problem and graph the solutions.

1) $\frac{|x|}{5} \leq 6$



2) $|x| + 14 \geq 27$



3) $11|x| < 66$



PREVIEW

Gain complete access to the largest collection of worksheets in all subjects!

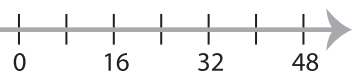
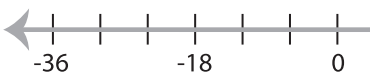
Members, please log in to download this worksheet.

Not a member? Please sign up to gain complete access.

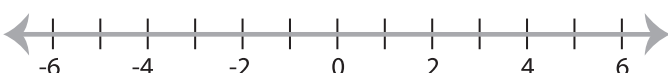
www.mathworksheets4kids.com



5) $-|x + 12| \geq 18$



7) $|16x| < 32$



8) $\frac{|x|}{12} > 2$

