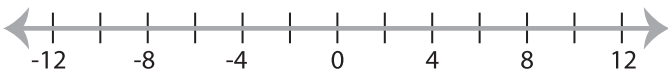


Solving & Graphing Inequalities

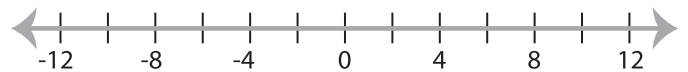
Two-step: S1

Solve each problem and graph the solutions.

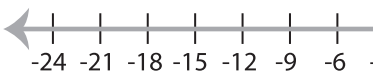
1) $|3x| - 8 > 16$



2) $\frac{|x|}{2} + 4 \leq 7$



3) $\frac{|x+6|}{3} \geq 5$



PREVIEW

Gain complete access to the largest
collection of worksheets in all subjects!

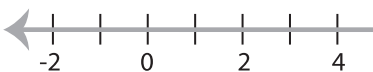
Members, please
log in to
download this
worksheet.

Not a member?
Please sign up to
gain complete
access.

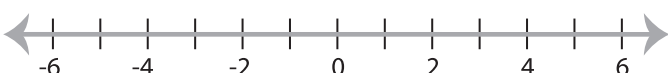
www.mathworksheets4kids.com



5) $|x - 5| + 11 < 13$



7) $|15x| - 10 > 65$



8) $|2x + 1| \leq 3$

