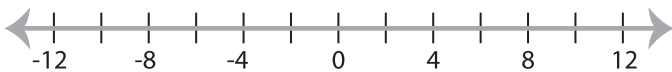


Solving & Graphing Inequalities

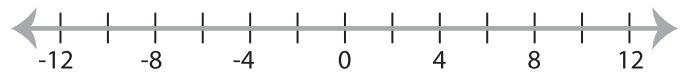
Two-step: S3

Solve each problem and graph the solutions.

1) $|20x| - 8 \geq 72$



2) $|x + 2| + 3 > 7$



3) $\frac{|x|}{5} + 30 \leq 34$



PREVIEW

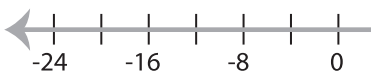
Gain complete access to the largest
collection of worksheets in all subjects!

Members, please
log in to
download this
worksheet.

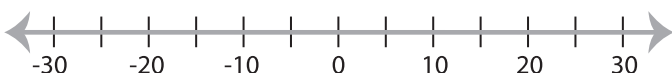
Not a member?
Please sign up to
gain complete
access.

www.mathworksheets4kids.com

5) $\frac{|x - 4|}{7} > -3$



7) $\frac{|4x|}{6} - 1 \leq 9$



8) $|2x| - 11 > 25$

