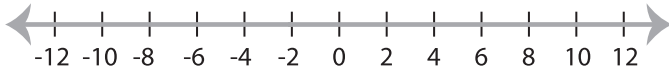


Graphing Compound Inequalities

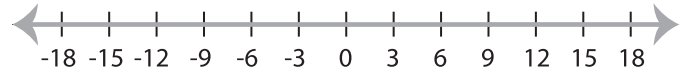
ES3

Graph the compound inequalities.

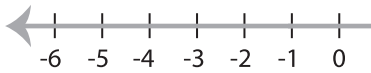
1) $x \leq 8$ and $x > -2$



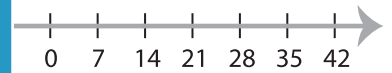
2) $-3 < x < 9$



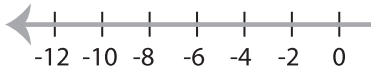
3) $1 \geq x \geq -1$



5



5) $x > 0$ and $x < 6$



PREVIEW

Gain complete access to the largest
collection of worksheets in all subjects!

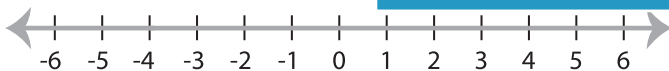
Members, please
log in to
download this
worksheet.

Not a member?
Please sign up to
gain complete
access.

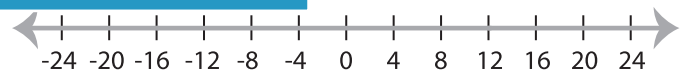
www.mathworksheets4kids.com



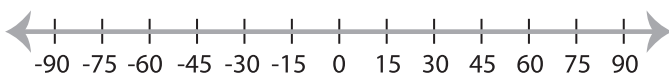
7) $-4 \leq x < 5$



-16



9) $x < 60$ and $x \geq -45$



10) $2 > x > -5$

