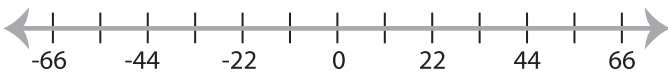


Solving & Graphing Inequalities

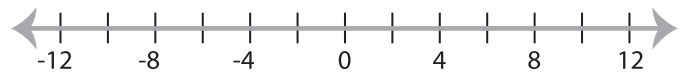
Two-step: S1

Solve each problem and graph the solutions.

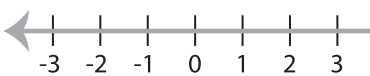
1) $2x - 9 \geq 13$ or $-4 > \frac{x-1}{3}$



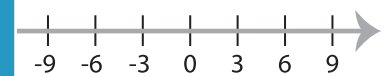
2) $5x + 7 > -3$ and $4x - 16 > 8$



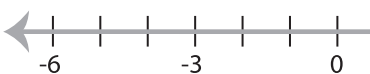
3) $4 < 5 + \frac{x}{2} \leq 9$



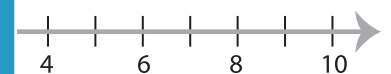
$18 \leq 3x + 9$



5) $-23 \geq 5x - 8$ or $6x -$



$9x - 11 \geq 25$



PREVIEW

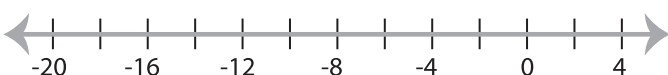
Gain complete access to the largest
collection of worksheets in all subjects!

Members, please
log in to
download this
worksheet.

Not a member?
Please sign up to
gain complete
access.

www.mathworksheets4kids.com

7) $\frac{x-2}{16} < -1$ and $7x + 5 < -23$



8) $-1 \leq 3x + 2 < 11$

