

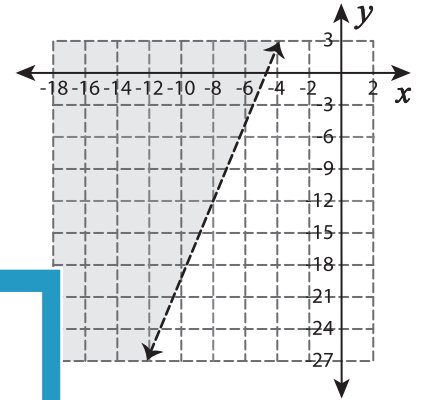
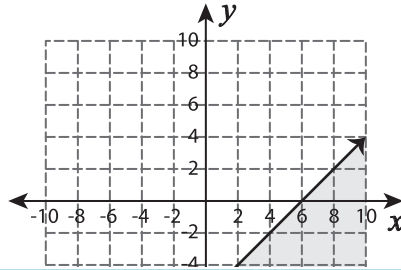
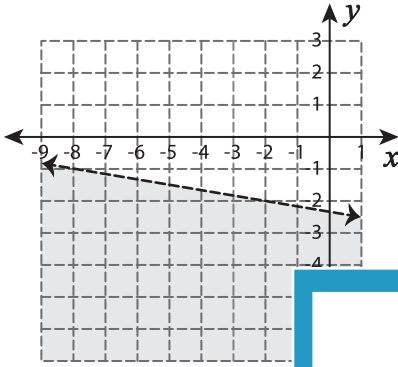
Linear Inequalities

A) Check whether each ordered pair is a solution of the graph.

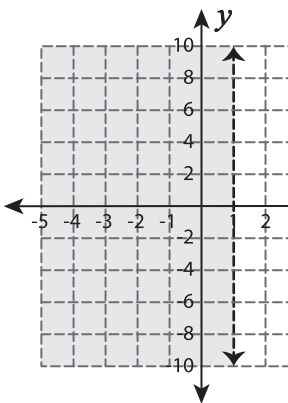
1) $(-5, -5)$

2) $(2, -3)$

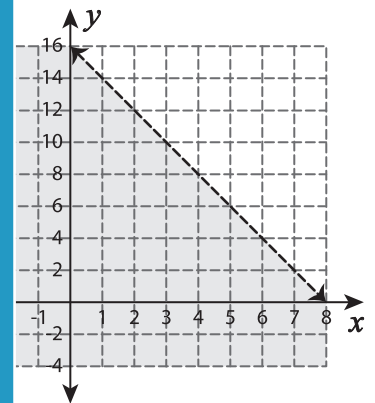
3) $(-4, -20)$



4) $(0, 6)$



$(8, 8)$



PREVIEW

Gain complete access to the largest collection of worksheets in all subjects!

Members, please log in to download this worksheet.

Not a member? Please sign up to gain complete access.

www.mathworksheets4kids.com

B) Check whether _____ graph.

1) $(20, 6)$ _____

2) $(-1, -5)$ _____

3) $(10, -3)$ _____

4) $(0, -4)$ _____

5) $(15, 3)$ _____

6) $(19, 2)$ _____

