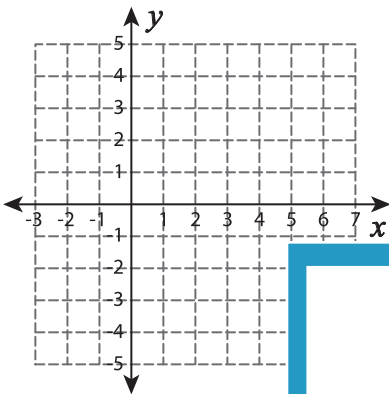


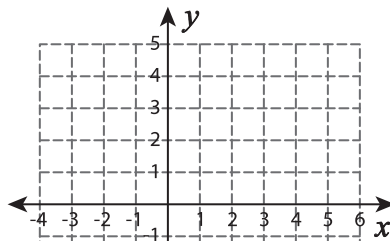
Graphing Linear Inequalities

Sketch the graph of each linear inequality.

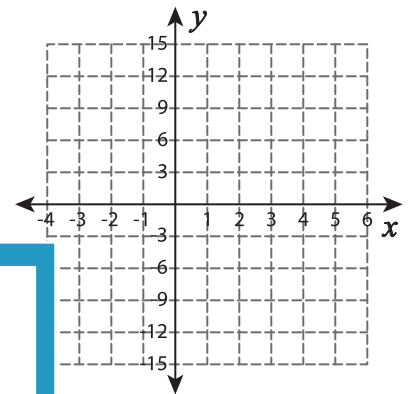
1) $y > 2x - 5$



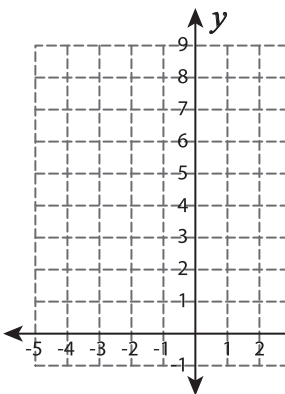
2) $y \leq -3x + 1$



3) $y \geq -5x + 3$



4) $y \leq 4 + 4x$



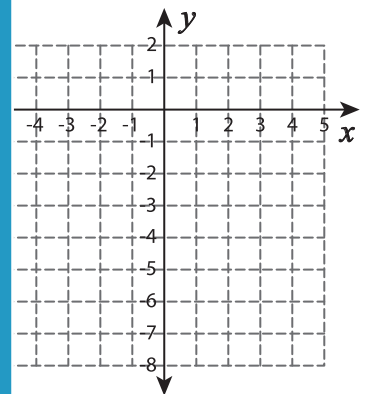
Gain complete access to the largest collection of worksheets in all subjects!

Members, please log in to download this worksheet.

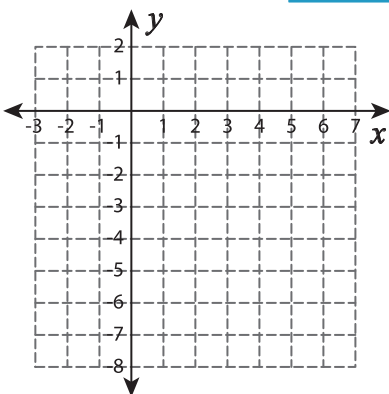
Not a member? Please sign up to gain complete access.

www.mathworksheets4kids.com

$< -6x - 1$



7) $y > -7$



$\leq 5 + x$

