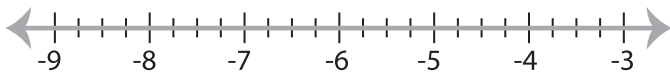


Solving & Graphing Inequalities

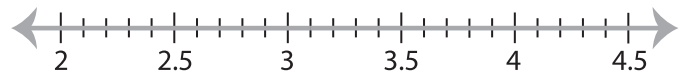
Decimals: S3

Solve each inequality and graph the solution.

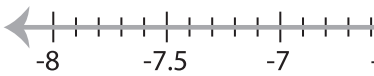
1) $2x - \frac{4x}{5} \leq -6.9$



2) $1.7 < \frac{9x - 14.64}{7.8}$



3) $6x + 17.25 \geq \frac{7x}{2}$



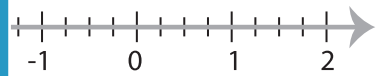
PREVIEW

Gain complete access to the largest
collection of worksheets in all subjects!

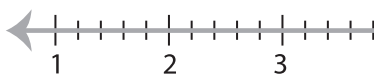
Members, please
log in to
download this
worksheet.

Not a member?
Please sign up to
gain complete
access.

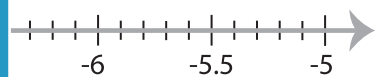
www.mathworksheets4kids.com



5) $\frac{7x - 2.59}{3.15} < 9.4$



9.2



7) $0.5(3x + 4.5) > 10.5x$



8) $\frac{8x}{7} + 3x \geq 5.8$

