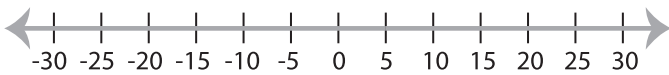


Solving & Graphing Inequalities

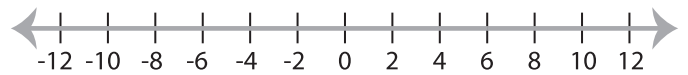
ES2

Solve each inequality and graph the solution.

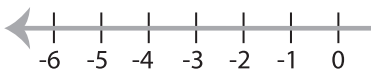
1) $\frac{5x - 3}{2} \leq 11$



2) $4(2x - 8) > 16$

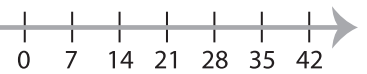


3) $3(4x + 1) \geq 27$

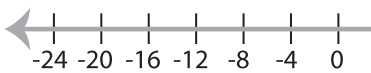


PREVIEW

Gain complete access to the largest
collection of worksheets in all subjects!



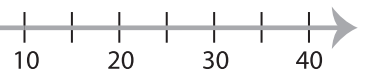
5) $\frac{8x + 14}{11} > 10$



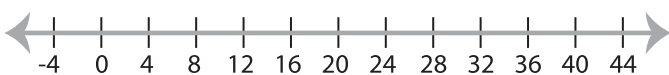
Members, please
log in to
download this
worksheet.

Not a member?
Please sign up to
gain complete
access.

www.mathworksheets4kids.com



7) $x - \frac{3x}{5} < 8$



8) $\frac{9(x - 4)}{12} \leq 3$

