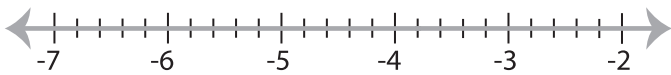


## Solving & Graphing Inequalities

Decimals: S1

Solve each inequality and graph the solution.

1)  $x - 12.7 < -16.5$



2)  $-1.8 > \frac{x}{2.5}$

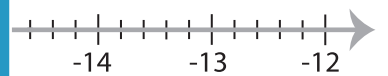


3)  $3.19 + x \leq -5.81$



**PREVIEW**

Gain complete access to the largest  
collection of worksheets in all subjects!

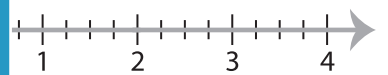
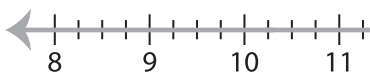


Members, please  
log in to  
download this  
worksheet.

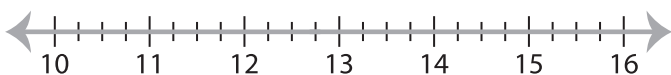
Not a member?  
Please sign up to  
gain complete  
access.

[www.mathworksheets4kids.com](http://www.mathworksheets4kids.com)

5)  $6.13 \geq x - 4.12$



7)  $x + 36.21 > 48.96$



8)  $-19.04 < 3.4x$

