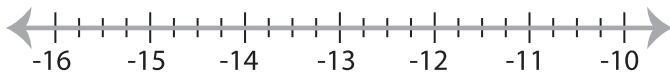


Solving & Graphing Inequalities

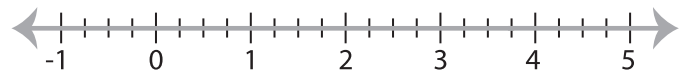
Decimals: S2

Solve each inequality and graph the solution.

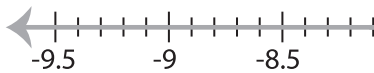
1) $11.07 + x > -2.18$



2) $x - 11.27 \geq -7.52$

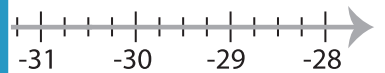


3) $3.4x < -27.54$

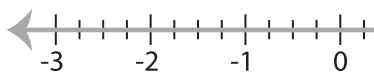


PREVIEW

Gain complete access to the largest
collection of worksheets in all subjects!



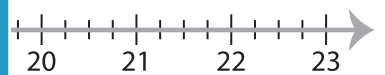
5) $x + 9.31 \leq 10.56$



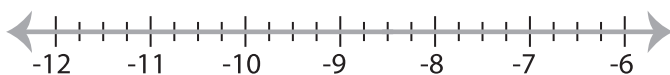
Members, please
log in to
download this
worksheet.

Not a member?
Please sign up to
gain complete
access.

www.mathworksheets4kids.com



7) $-58.65 \geq 6.9x$



8) $8 > \frac{x}{1.7}$

