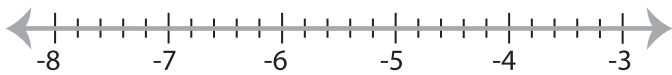


## Solving & Graphing Inequalities

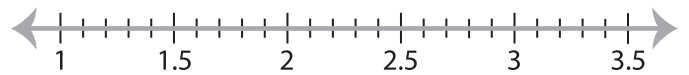
Decimals: S3

Solve each inequality and graph the solution.

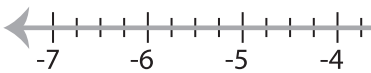
1)  $7.9x < -45.82$



2)  $3.5 \leq \frac{x}{0.6}$

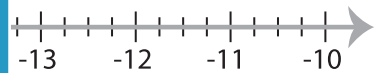


3)  $x - 15.46 \geq -18.96$

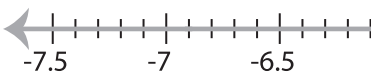


**PREVIEW**

Gain complete access to the largest  
collection of worksheets in all subjects!



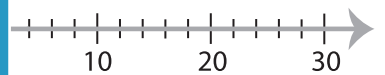
5)  $-31.74 \geq 4.6x$



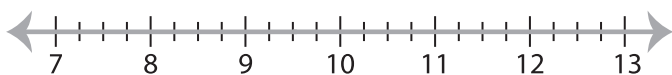
Members, please  
log in to  
download this  
worksheet.

Not a member?  
Please sign up to  
gain complete  
access.

[www.mathworksheets4kids.com](http://www.mathworksheets4kids.com)



7)  $x + 28.43 \leq 37.93$



8)  $-1.74 < x - 10.49$

