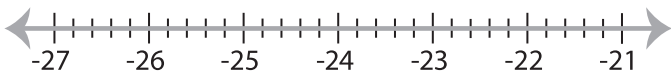


Solving & Graphing Inequalities

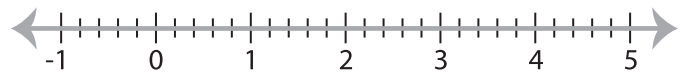
Decimals: S4

Solve each inequality and graph the solution.

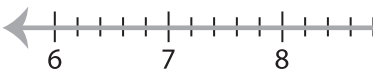
1) $-1.44 > x + 21.96$



2) $11.05x > 13.26$



3) $x - 1.6 \leq 9.2$



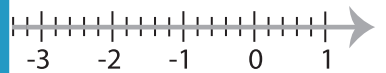
PREVIEW

Gain complete access to the largest
collection of worksheets in all subjects!

Members, please
log in to
download this
worksheet.

Not a member?
Please sign up to
gain complete
access.

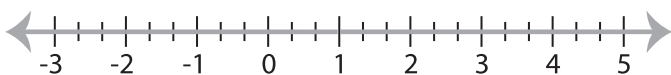
www.mathworksheets4kids.com



5) $\frac{x}{0.9} > -6$



7) $-39.48 \leq 19.74x$



8) $0.6 \geq \frac{x}{6.5}$

