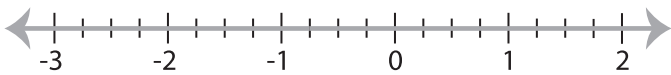


Solving & Graphing Inequalities

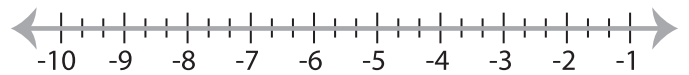
Decimals: S5

Solve each inequality and graph the solution.

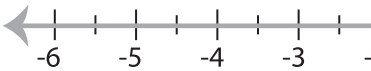
1) $-7.5 \geq \frac{x}{0.1}$



2) $x + 4.13 < -3.87$

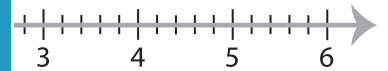


3) $6.26 \leq 10.76 + x$

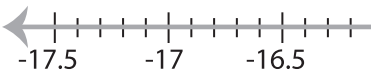


PREVIEW

Gain complete access to the largest
collection of worksheets in all subjects!



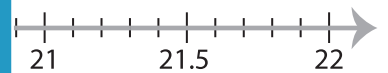
5) $2.2x < -36.08$



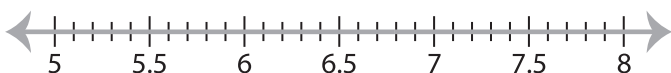
Members, please
log in to
download this
worksheet.

Not a member?
Please sign up to
gain complete
access.

www.mathworksheets4kids.com



7) $x - 15.03 > -8.23$



8) $-4.18 \leq 0.1x$

