

Name : _____

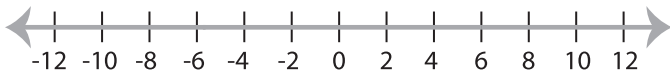
Score : _____

Solving & Graphing Inequalities

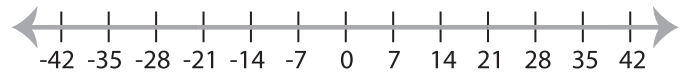
ES1

Solve each inequality and graph the solution.

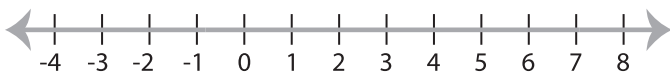
1) $x - 2 > 4$



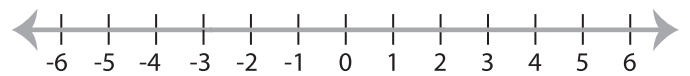
2) $\frac{x}{3} \leq 7$



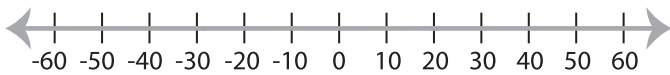
3) $6x < 30$



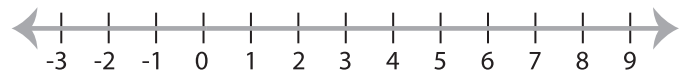
4) $x + 9 \geq 11$



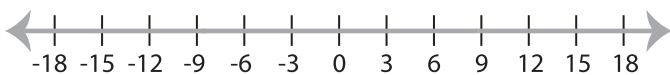
5) $\frac{x}{2} \geq 10$



6) $x - 5 \leq 2$



7) $7 + x < 16$



8) $4x \geq 32$

