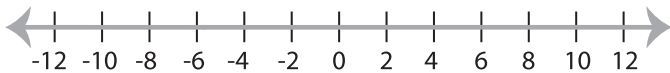


Solving & Graphing Inequalities

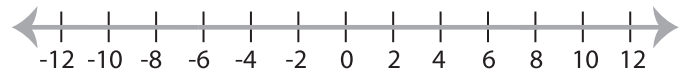
ES2

Solve each inequality and graph the solution.

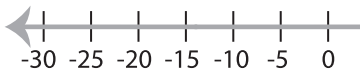
1) $9x \leq 54$



2) $x + 1 < 9$

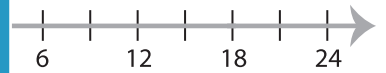


3) $x - 7 > 8$



PREVIEW

Gain complete access to the largest
collection of worksheets in all subjects!

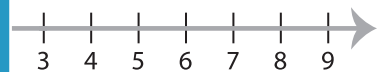
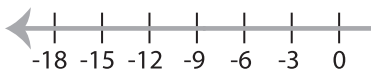


Members, please
log in to
download this
worksheet.

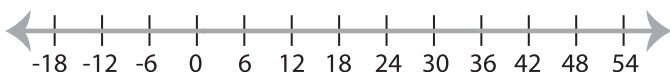
Not a member?
Please sign up to
gain complete
access.

www.mathworksheets4kids.com

5) $12 + x \geq 24$



7) $\frac{x}{9} > 4$



8) $x - 2 \leq 13$

