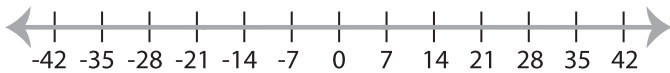


Solving & Graphing Inequalities

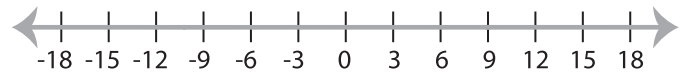
ES3

Solve each inequality and graph the solution.

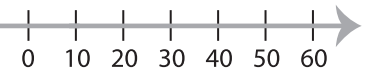
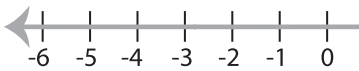
1) $9 + x \geq 16$



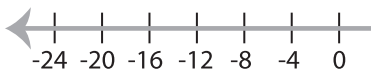
2) $\frac{x}{9} < 1$



3) $5x > 10$



5) $x - 5 \geq 11$



PREVIEW

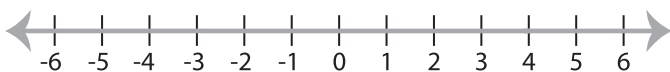
Gain complete access to the largest
collection of worksheets in all subjects!

Members, please
log in to
download this
worksheet.

Not a member?
Please sign up to
gain complete
access.

www.mathworksheets4kids.com

7) $x + 8 > 12$



8) $2x \leq 14$

