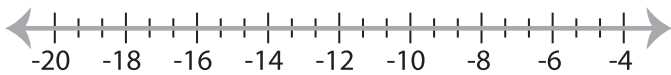


## Solving & Graphing Inequalities

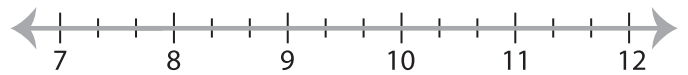
Fractions: S5

Solve each inequality and graph the solution.

1)  $\frac{x}{6} < -3$



2)  $x - 8 \geq -\frac{1}{3}$



3)  $\frac{7}{2} \geq x - \frac{9}{4}$



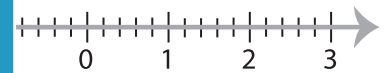
**PREVIEW**

Gain complete access to the largest  
collection of worksheets in all subjects!

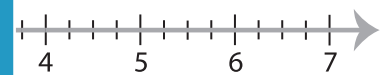
Members, please  
log in to  
download this  
worksheet.

Not a member?  
Please sign up to  
gain complete  
access.

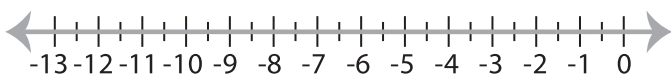
[www.mathworksheets4kids.com](http://www.mathworksheets4kids.com)



5)  $x + \frac{9}{2} > \frac{1}{6}$



7)  $-\frac{9}{16} \leq \frac{3}{8}x$



8)  $-9 \geq \frac{3}{2} + x$

