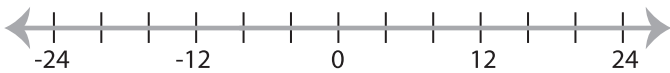


Solving & Graphing Inequalities

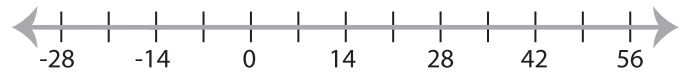
DS1

Solve each inequality and graph the solution.

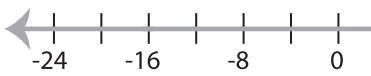
1) $-48 < 6x$



2) $-4 \geq x + 10$

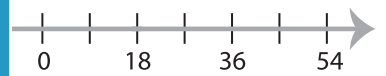


3) $\frac{x}{2} \geq -8$

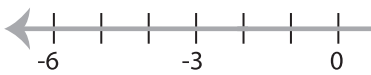


PREVIEW

Gain complete access to the largest
collection of worksheets in all subjects!



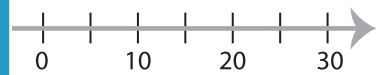
5) $-4x \leq 8$



Members, please
log in to
download this
worksheet.

Not a member?
Please sign up to
gain complete
access.

www.mathworksheets4kids.com



7) $-7 > \frac{x}{11}$



8) $x - 2 < -23$

