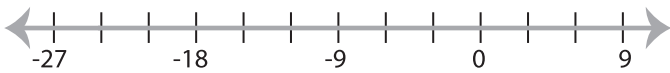


## Solving & Graphing Inequalities

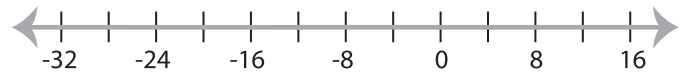
DS2

Solve each inequality and graph the solution.

1)  $-29 \geq x - 5$



3)  $\frac{x}{3} < -4$

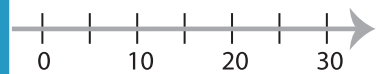


3)  $-22 \leq 11x$

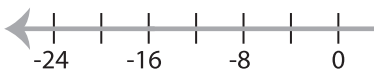


**PREVIEW**

Gain complete access to the largest  
collection of worksheets in all subjects!



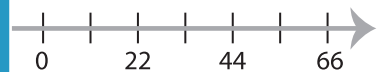
5)  $-8 < \frac{x}{2}$



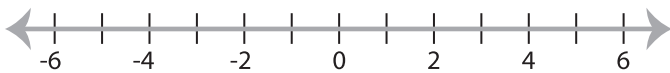
Members, please  
log in to  
download this  
worksheet.

Not a member?  
Please sign up to  
gain complete  
access.

[www.mathworksheets4kids.com](http://www.mathworksheets4kids.com)



7)  $24 \geq -8x$



8)  $-21 > 3x$

