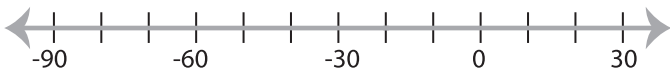


Solving & Graphing Inequalities

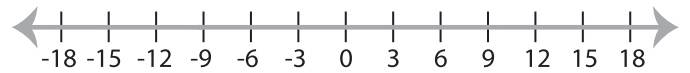
DS3

Solve each inequality and graph the solution.

1) $-8 < x + 12$



2) $\frac{x}{9} \leq -1$

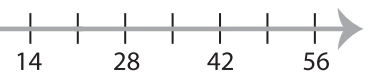


3) $-21 \geq 7x$

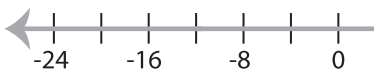


PREVIEW

Gain complete access to the largest
collection of worksheets in all subjects!



5) $-3 \leq \frac{x}{4}$



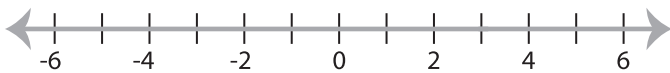
Members, please
log in to
download this
worksheet.

Not a member?
Please sign up to
gain complete
access.

www.mathworksheets4kids.com



7) $x - 1 > 2$



8) $-32 \leq 8x$

