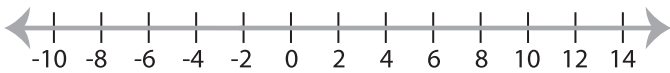


Solving & Graphing Inequalities

DS4

Solve each inequality and graph the solution.

1) $-17x > 34$



2) $-20 > x - 13$



3) $-15 \geq x + 3$

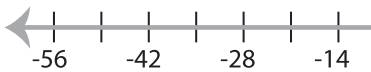


PREVIEW

Gain complete access to the largest
collection of worksheets in all subjects!



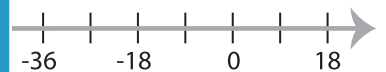
5) $10 \leq x - 4$



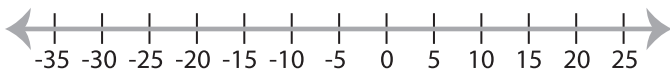
Members, please
log in to
download this
worksheet.

Not a member?
Please sign up to
gain complete
access.

www.mathworksheets4kids.com



7) $-3 \geq \frac{x}{5}$



8) $8 > x + 11$

