

Solving & Graphing Inequalities

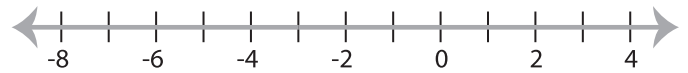
DS5

Solve each inequality and graph the solution.

1) $12x \leq 48$



2) $27 > -9x$

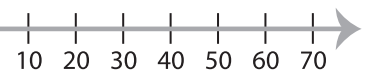


3) $-13 < x + 8$

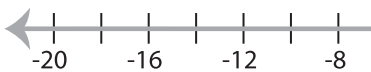


PREVIEW

Gain complete access to the largest
collection of worksheets in all subjects!



5) $-7 > x - 5$



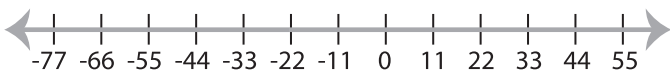
Members, please
log in to
download this
worksheet.

Not a member?
Please sign up to
gain complete
access.

www.mathworksheets4kids.com



7) $\frac{x}{11} \leq -2$



8) $x - 3 > 30$

