

## Solving & Graphing Inequalities

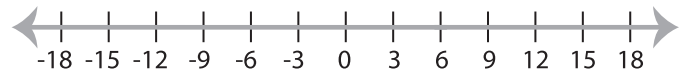
MS1

Solve each inequality and graph the solution.

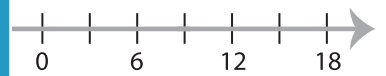
1)  $32 \geq 8x$



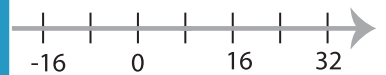
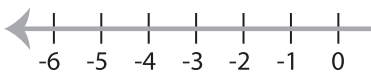
2)  $\frac{x}{2} < 3$



3)  $6 \leq x + 9$



5)  $18 < 9x$



# PREVIEW

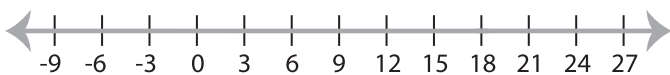
Gain complete access to the largest  
collection of worksheets in all subjects!

Members, please  
log in to  
download this  
worksheet.

Not a member?  
Please sign up to  
gain complete  
access.

[www.mathworksheets4kids.com](http://www.mathworksheets4kids.com)

7)  $x - 15 > 3$



8)  $x + 11 \leq 10$

