

## Solving & Graphing Inequalities

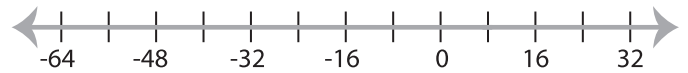
MS2

Solve each inequality and graph the solution.

1)  $8 > x + 9$



2)  $48 \leq 6x$



3)  $12 \geq x - 9$



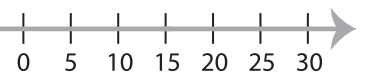
# PREVIEW

Gain complete access to the largest  
collection of worksheets in all subjects!

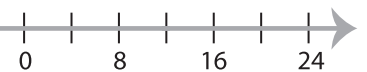
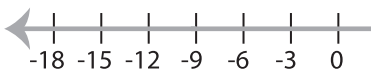
Members, please  
log in to  
download this  
worksheet.

Not a member?  
Please sign up to  
gain complete  
access.

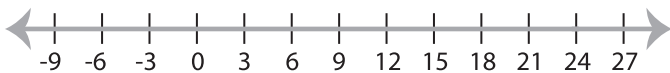
[www.mathworksheets4kids.com](http://www.mathworksheets4kids.com)



5)  $x + 16 \leq 7$



7)  $4 \geq \frac{x}{6}$



8)  $x - 17 < 8$

