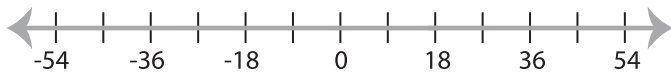


## Solving & Graphing Inequalities

MS3

Solve each inequality and graph the solution.

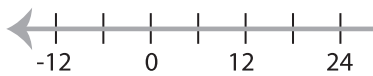
1)  $3 > x - 15$



2)  $12 \leq x + 15$

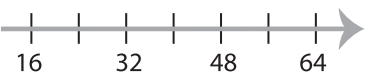


3)  $\frac{x}{6} < 7$

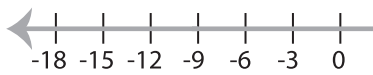


**PREVIEW**

Gain complete access to the largest  
collection of worksheets in all subjects!



5)  $x + 19 > 10$



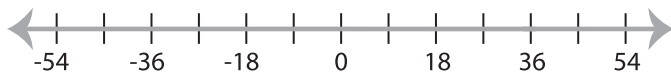
Members, please  
log in to  
download this  
worksheet.

Not a member?  
Please sign up to  
gain complete  
access.

[www.mathworksheets4kids.com](http://www.mathworksheets4kids.com)



7)  $12 \geq \frac{x}{3}$



8)  $14 < 2x$

