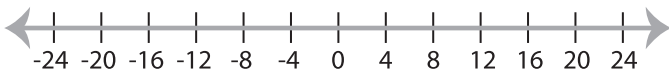


Solving & Graphing Inequalities

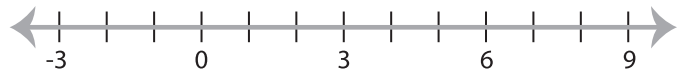
MS4

Solve each inequality and graph the solution.

1) $x - 1 > 19$



2) $36 \geq 9x$

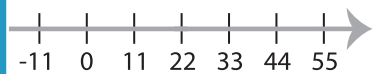


3) $18 < 3x$

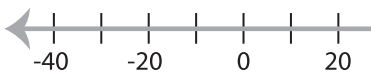


PREVIEW

Gain complete access to the largest
collection of worksheets in all subjects!



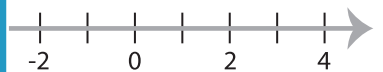
5) $6 \leq \frac{x}{5}$



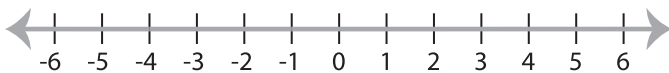
Members, please
log in to
download this
worksheet.

Not a member?
Please sign up to
gain complete
access.

www.mathworksheets4kids.com



7) $11 \geq 12 + x$



8) $\frac{x}{7} > 4$

