

Solving & Graphing Inequalities

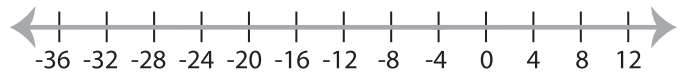
MS5

Solve each inequality and graph the solution.

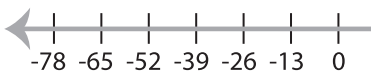
1) $3 \leq \frac{x}{4}$



2) $17 + x \geq 13$

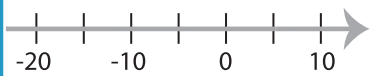


3) $16 \geq x - 10$

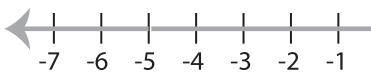


PREVIEW

Gain complete access to the largest
collection of worksheets in all subjects!



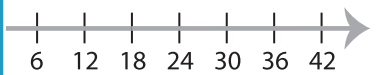
5) $1 > x + 6$



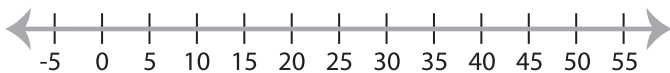
Members, please
log in to
download this
worksheet.

Not a member?
Please sign up to
gain complete
access.

www.mathworksheets4kids.com



7) $7x \geq 35$



8) $8 \leq x - 14$

