

Name : _____

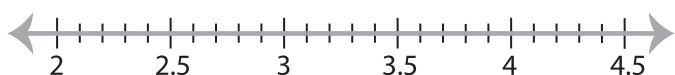
Score : _____

Solving & Graphing Inequalities

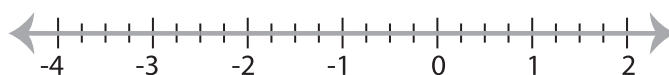
Decimals: S2

Solve each inequality and graph the solution.

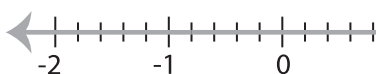
1) $-7x + 32.55 > 3.5x$



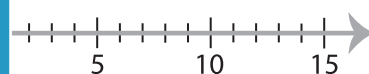
2) $-6 \geq \frac{x-2}{0.75}$



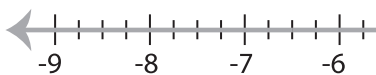
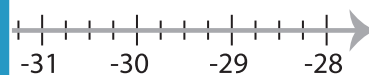
3) $-28.15 < 11x - 19.35$



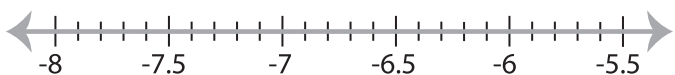
4) $3.18x$



5) $\frac{x+5.3}{0.15} > -8$

**PREVIEW**Gain complete access to the largest
collection of worksheets in all subjects!Members, please
log in to
download this
worksheet.Not a member?
Please sign up to
gain complete
access.www.mathworksheets4kids.com

7) $-2.6x - 24.15 < 0.9x$



8) $3 + \frac{x}{1.4} \leq -6.5$

