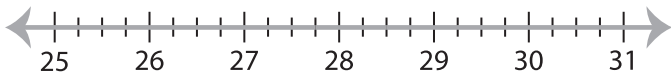


Solving & Graphing Inequalities

Decimals: S4

Solve each inequality and graph the solution.

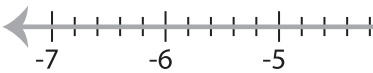
1) $4 - \frac{x}{2.5} < -7.4$



2) $-3.5x + 23.65 \leq 0.8x$



3) $-1.05x - 15.96 < 4.27$

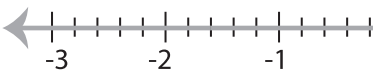


PREVIEW

Gain complete access to the largest
collection of worksheets in all subjects!



5) $-26.4 \leq 12x - 7.2$



Members, please
log in to
download this
worksheet.

Not a member?
Please sign up to
gain complete
access.

www.mathworksheets4kids.com



7) $6 > \frac{x+3}{1.45}$



8) $-8x + 32.48 \geq 3.6x$

