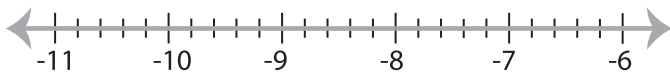


Solving & Graphing Inequalities

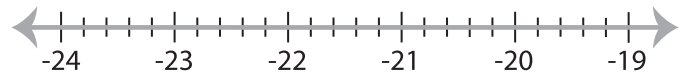
Decimals: S5

Solve each inequality and graph the solution.

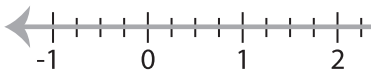
1) $-7.5x - 18.4 \geq -5.2x$



2) $8.41 < \frac{x}{3} + 15.61$



3) $6.24 > -4x + 20.24$



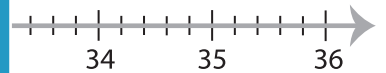
PREVIEW

Gain complete access to the largest
collection of worksheets in all subjects!

Members, please
log in to
download this
worksheet.

Not a member?
Please sign up to
gain complete
access.

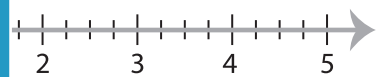
www.mathworksheets4kids.com




5) $11.7 - \frac{x}{2.7} < -4.3$



6) $x > -7.65x$



7) $\frac{x-8}{3.5} \geq 0.8$



8) $-10 \leq \frac{x}{6.2} - 8.5$

