

Name : _____

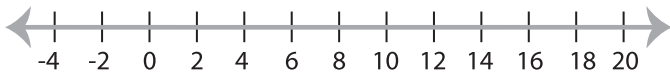
Score : _____

Solving & Graphing Inequalities

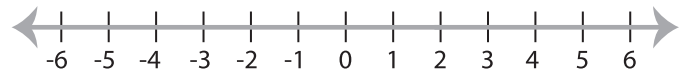
ES1

Solve each inequality and graph the solution.

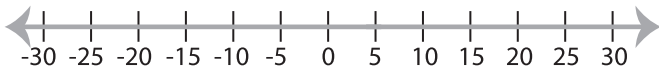
1) $\frac{x}{2} + 3 > 9$



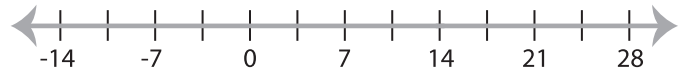
2) $4x + 5 \leq 13$



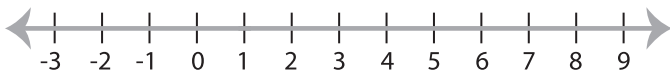
3) $7x - 19 < 16$



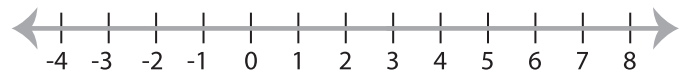
4) $\frac{x-4}{5} \geq 2$



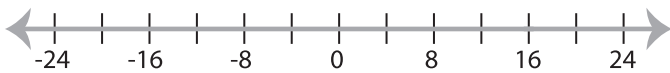
5) $9 + 3x > 12$



6) $3x - 4 \leq 5$



7) $\frac{x}{8} + 1 < 3$



8) $2x + 5 \geq 19$

