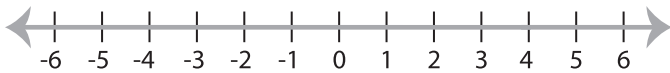


Solving & Graphing Inequalities

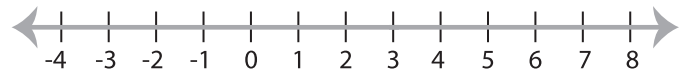
ES2

Solve each inequality and graph the solution.

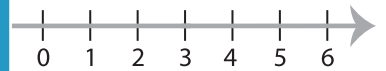
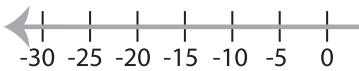
1) $3x - 10 < 2$



2) $5x + 9 \geq 24$



3) $\frac{x-4}{2} > 3$

**PREVIEW**

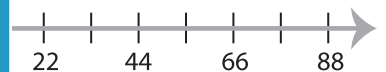
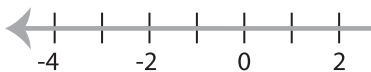
Gain complete access to the largest collection of worksheets in all subjects!

Members, please log in to download this worksheet.

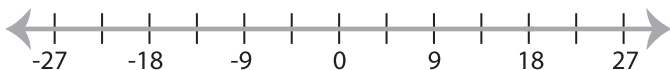
Not a member? Please sign up to gain complete access.

www.mathworksheets4kids.com

5) $9x - 1 > 17$



7) $\frac{x}{6} + 2 \leq 5$



8) $4 + 2x < 18$

