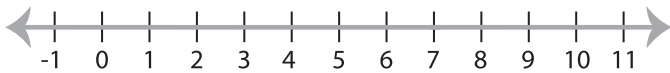


Solving & Graphing Inequalities

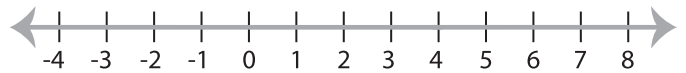
ES3

Solve each inequality and graph the solution.

1) $\frac{x}{7} + 2 > 3$



2) $8x - 19 < 13$



3) $6x + 5 \leq 17$



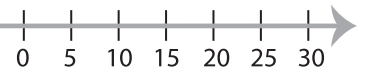
PREVIEW

Gain complete access to the largest
collection of worksheets in all subjects!

Members, please
log in to
download this
worksheet.

Not a member?
Please sign up to
gain complete
access.

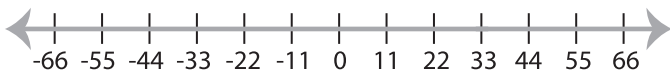
www.mathworksheets4kids.com



5) $3x - 12 > 15$



7) $\frac{x-1}{4} \leq 8$



8) $7x - 1 < 6$

