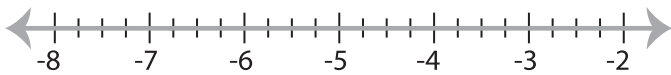


Solving & Graphing Inequalities

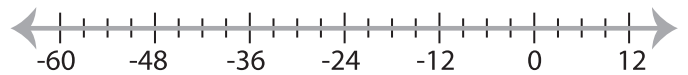
Fractions: S1

Solve each inequality and graph the solution.

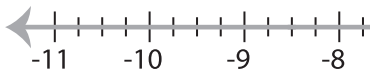
1) $\frac{7}{4} \leq \frac{x}{3} + 4$



2) $\frac{1}{8}x - 10 > -16$



3) $\frac{x-8}{3} < -\frac{11}{2}$



PREVIEW

Gain complete access to the largest
collection of worksheets in all subjects!

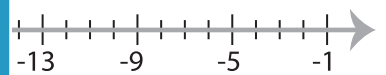
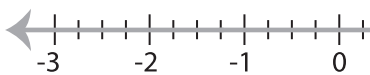


Members, please
log in to
download this
worksheet.

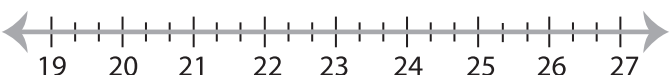
Not a member?
Please sign up to
gain complete
access.

www.mathworksheets4kids.com

5) $\frac{1}{5}x + 1 \geq \frac{3}{4}$



7) $\frac{x}{4} - \frac{2}{3} < 5$



8) $\frac{12}{5} \leq \frac{x+4}{10}$

