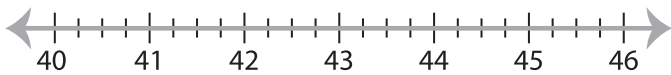


## Solving & Graphing Inequalities

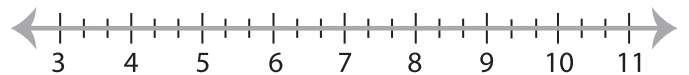
Fractions: S2

Solve each inequality and graph the solution.

1)  $\frac{x}{4} - \frac{3}{2} > 9$



2)  $\frac{7}{3} \geq \frac{x+12}{8}$

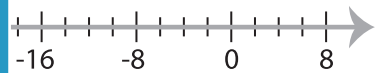


3)  $\frac{1}{5}x + 2 \leq \frac{11}{3}$



**PREVIEW**

Gain complete access to the largest  
collection of worksheets in all subjects!

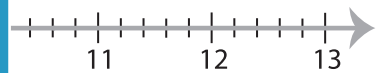


Members, please  
log in to  
download this  
worksheet.

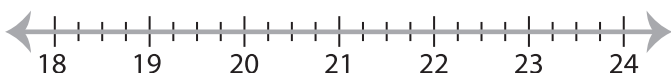
Not a member?  
Please sign up to  
gain complete  
access.

[www.mathworksheets4kids.com](http://www.mathworksheets4kids.com)

5)  $\frac{x-1}{5} > -\frac{3}{4}$



7)  $\frac{17}{2} \geq \frac{x}{3} + 1$



8)  $\frac{1}{2}x - 19 < -21$

