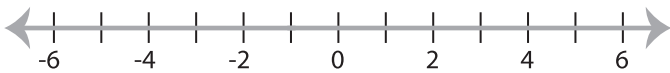


**Solving & Graphing Inequalities**

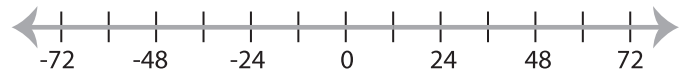
DS1

Solve each inequality and graph the solution.

1)  $6x - 4 < -10$



2)  $17 \leq \frac{x}{2} + 11$

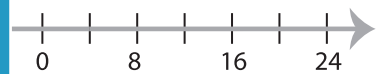


3)  $-4x - 7 > 1$

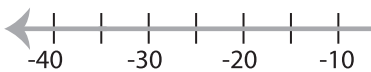


**PREVIEW**

Gain complete access to the largest collection of worksheets in all subjects!



5)  $-9 < \frac{x}{5} - 2$

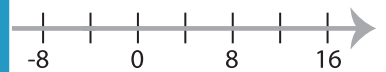


Members, please log in to download this worksheet.

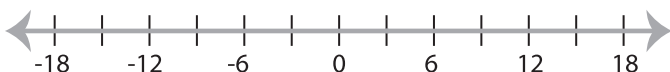
Not a member? Please sign up to gain complete access.

[www.mathworksheets4kids.com](http://www.mathworksheets4kids.com)

1x



7)  $-1 > 5x - 16$



8)  $-7 \leq \frac{x+2}{4}$

