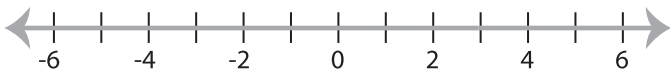


**Solving & Graphing Inequalities**

DS2

Solve each inequality and graph the solution.

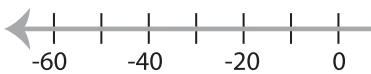
1)  $-6 \leq -7x + 15$



2)  $-10x - 8 > 2$



3)  $-5 < \frac{x+10}{4}$



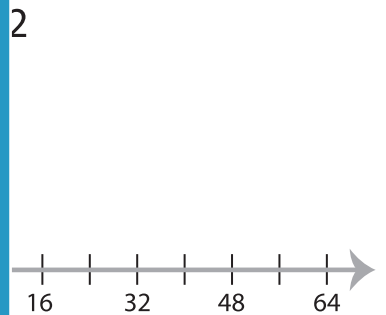
**PREVIEW**

Gain complete access to the largest collection of worksheets in all subjects!

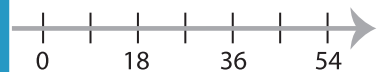
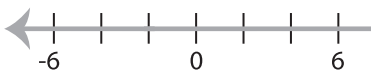
Members, please log in to download this worksheet.

Not a member? Please sign up to gain complete access.

[www.mathworksheets4kids.com](http://www.mathworksheets4kids.com)



5)  $-12x - 8 < 16$



7)  $2 \geq \frac{x-8}{5}$



8)  $3x - 4 \leq -16$

