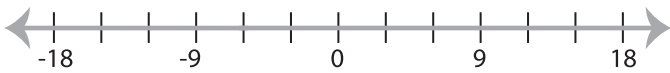


Solving & Graphing Inequalities

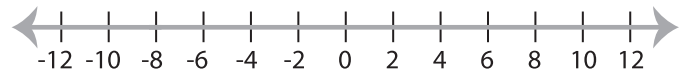
DS3

Solve each inequality and graph the solution.

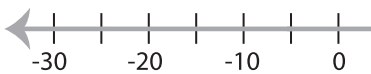
1) $-1 > \frac{x+4}{2}$



2) $-2x + 8 \leq 24$

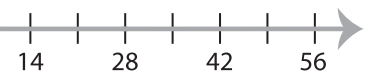


3) $-6x - 13 \geq 17$



PREVIEW

Gain complete access to the largest
collection of worksheets in all subjects!



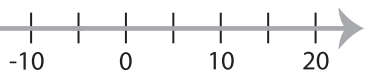
5) $-5x \leq -8x + 21$



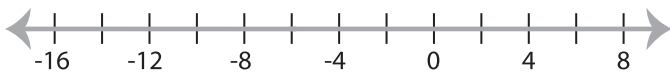
Members, please
log in to
download this
worksheet.

Not a member?
Please sign up to
gain complete
access.

www.mathworksheets4kids.com



7) $-7x - 19 > 23$



8) $-1 < \frac{x+2}{5}$

